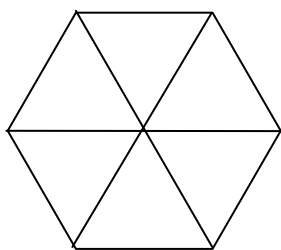
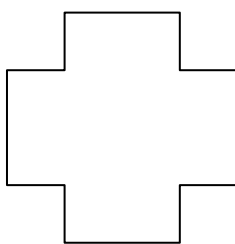


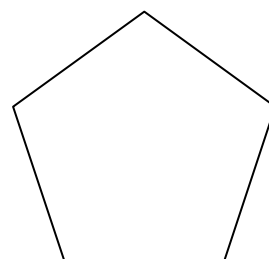
Hachure la fraction demandée.



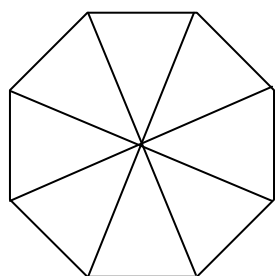
$\frac{1}{2}$



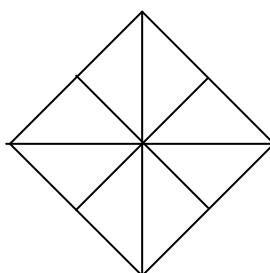
$\frac{1}{2}$



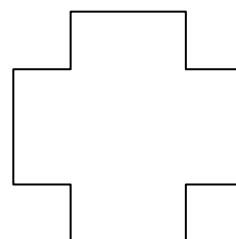
$\frac{1}{2}$



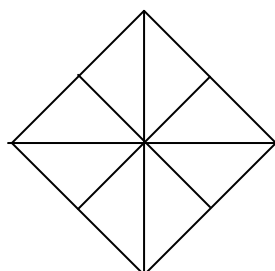
$\frac{1}{4}$



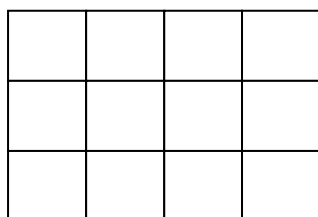
$\frac{1}{4}$



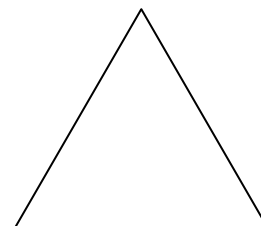
$\frac{1}{4}$



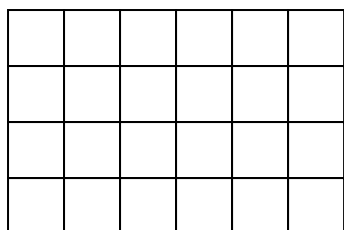
$\frac{1}{2}$



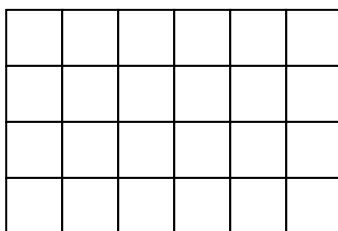
$\frac{1}{3}$



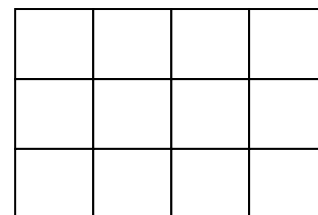
$\frac{1}{2}$



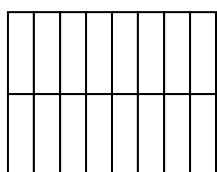
$\frac{1}{3}$



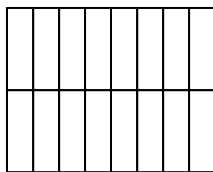
$\frac{1}{2}$




$\frac{1}{4}$



$\frac{1}{4}$



$\frac{1}{2}$



$\frac{1}{4}$