
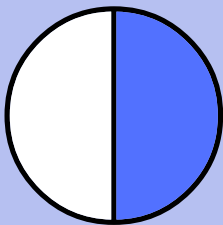
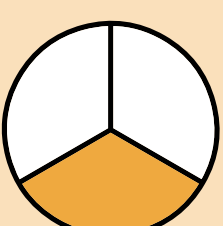
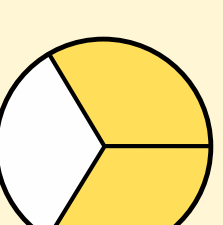

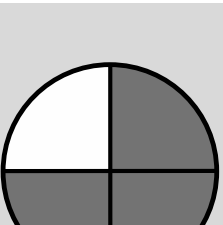
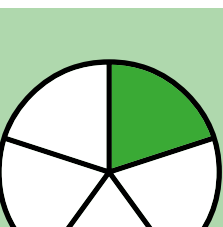
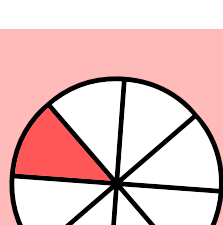
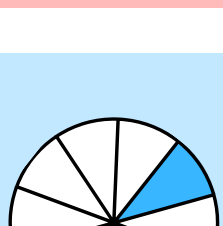


# BIEN COMPRENDRE....

## LES FRACTIONS


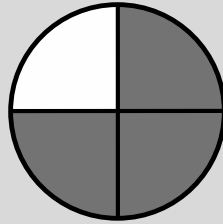
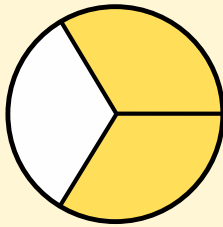

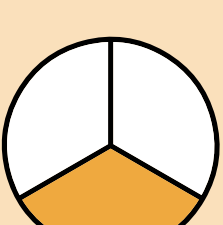


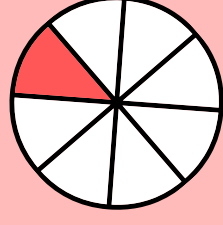
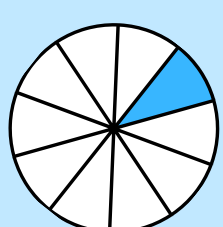
RETIENS LES ÉQUIVALENCES DE FRACTIONS SUIVANTES

$\frac{1}{1}$	1	100%		un
$\frac{1}{2}$	0,5	50%		un demi
$\frac{1}{3}$	0,333	33,3%		un tiers
$\frac{2}{3}$	0,666	66,6%		deux tiers
$\frac{1}{4}$	0,25	25%		un quart
$\frac{3}{4}$	0,75	75%		trois quarts
$\frac{1}{5}$	0,2	20%		un cinquième
$\frac{1}{8}$	0,125	12,5%		un huitième
$\frac{1}{10}$	0,1	10%		un dixième

# BIEN COMPRENDRE...

## LES FRACTIONS

LES MÊMES FRACTIONS DE LA PLUS GRANDE À LA PLUS PETITE

$\frac{1}{1}$	1	100%		un
$\frac{3}{4}$	0,75	75%		trois quarts
$\frac{2}{3}$	0,666	66,6%		deux tiers
$\frac{1}{2}$	0,5	50%		un demi
$\frac{1}{3}$	0,333	33,3%		un tiers
$\frac{1}{4}$	0,25	25%		un quart
$\frac{1}{5}$	0,2	20%		un cinquième
$\frac{1}{8}$	0,125	12,5%		un huitième
$\frac{1}{10}$	0,1	10%		un dixième